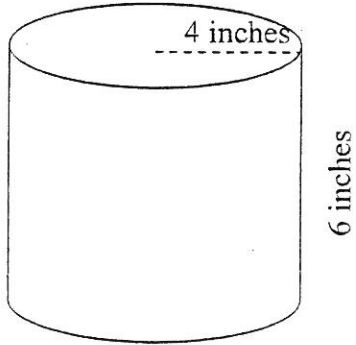


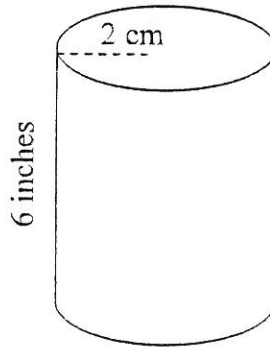
Part A

Name \_\_\_\_\_

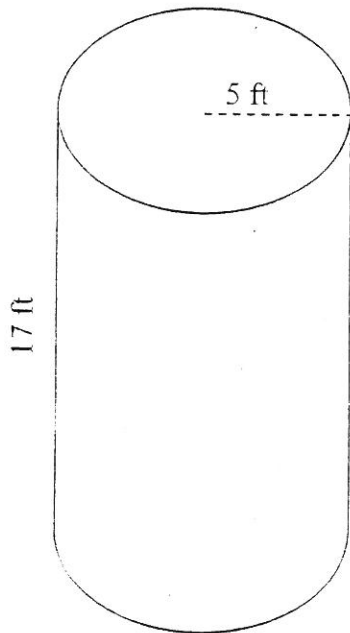
1) Volume = \_\_\_\_\_  
Surface Area = \_\_\_\_\_



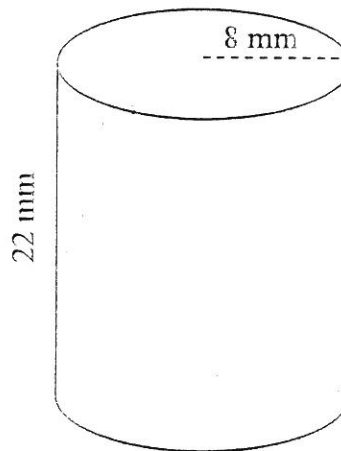
2) Volume = \_\_\_\_\_  
Surface Area = \_\_\_\_\_



3) Volume = \_\_\_\_\_  
Surface Area = \_\_\_\_\_



4) Volume = \_\_\_\_\_  
Surface Area = \_\_\_\_\_



\* Label correctly \*

